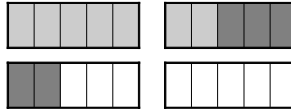


Rechnen im Zwanzigerfeld Übungen

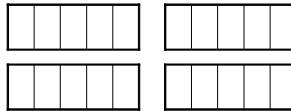


Markiere im Zwanzigerfeld und berechne.

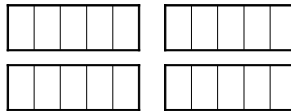
$7 + 5 = \boxed{12}$



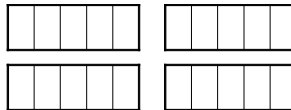
$9 + 9 = \boxed{}$



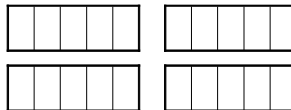
$6 + 9 = \boxed{}$



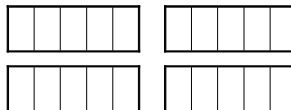
$4 + 8 = \boxed{}$



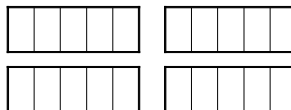
$7 + 6 = \boxed{}$



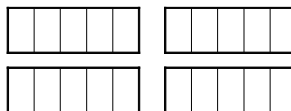
$7 + 4 = \boxed{}$



$3 + 9 = \boxed{}$

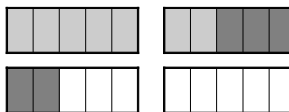


$9 + 6 = \boxed{}$

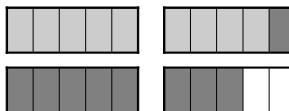


Markiere im Zwanzigerfeld und berechne.

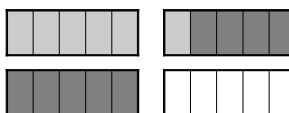
$7 + 5 = 12$



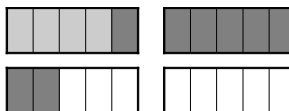
$9 + 9 = 18$



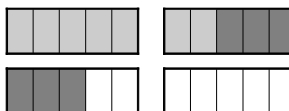
$6 + 9 = 15$



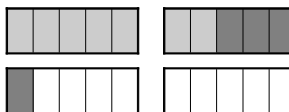
$4 + 8 = 12$



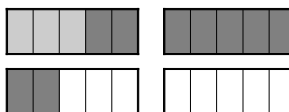
$7 + 6 = 13$



$7 + 4 = 11$



$3 + 9 = 12$



$9 + 6 = 15$

