

Rechnen im Zehnerfeld Übungen

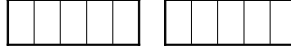


Markiere im Zehnerfeld und berechne.

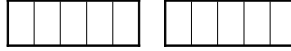
$3 + 2 = \boxed{5}$



$5 + 3 = \boxed{}$



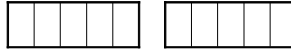
$5 + 4 = \boxed{}$



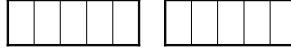
$4 + 2 = \boxed{}$



$3 + 5 = \boxed{}$



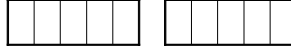
$3 + 3 = \boxed{}$



$1 + 8 = \boxed{}$



$2 + 5 = \boxed{}$



$2 + 3 = \boxed{}$



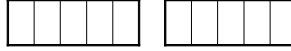
$3 + 6 = \boxed{}$



$7 + 1 = \boxed{}$



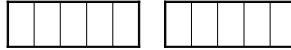
$3 + 4 = \boxed{}$



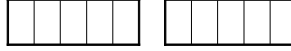
$3 + 1 = \boxed{}$



$5 + 5 = \boxed{}$




$1 + 1 = \boxed{}$



Markiere im Zehnerfeld und berechne.

$3 + 2 = 5$



$5 + 3 = 8$




$5 + 4 = 9$



$4 + 2 = 6$



$3 + 5 = 8$



$3 + 3 = 6$



$1 + 8 = 9$



$2 + 5 = 7$



$2 + 3 = 5$



$3 + 6 = 9$



$7 + 1 = 8$



$3 + 4 = 7$



$3 + 1 = 4$



$5 + 5 = 10$



$1 + 1 = 2$

