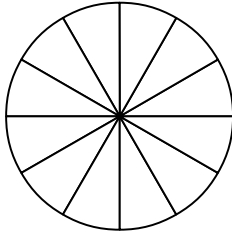


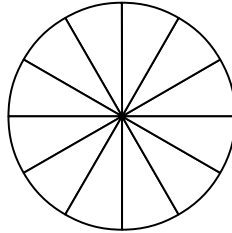
Darstellung von Brüchen Übungen



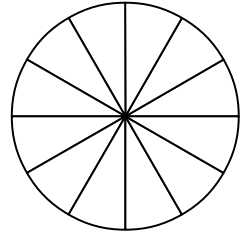
Markiere:



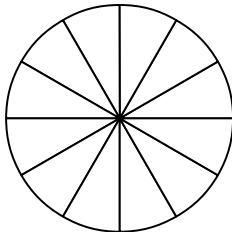
$$\frac{2}{6}$$



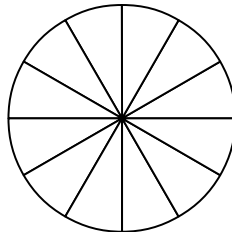
$$\frac{1}{2}$$



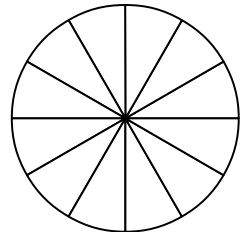
$$\frac{2}{3}$$



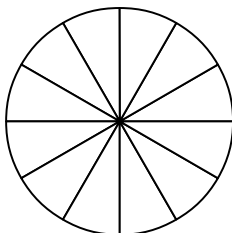
$$\frac{3}{6}$$



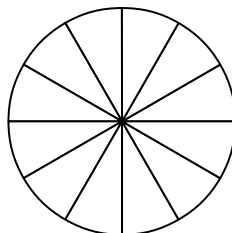
$$\frac{4}{6}$$



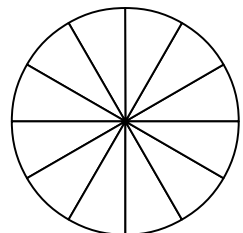
$$\frac{7}{12}$$



$$\frac{3}{4}$$



$$\frac{3}{12}$$



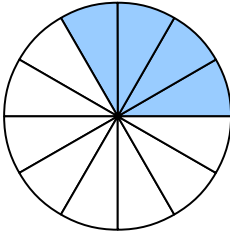
$$\frac{5}{6}$$

Darstellung von Brüchen

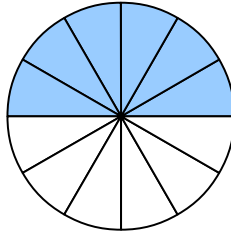
Lösungen



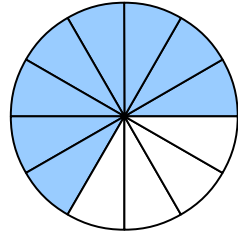
Markiere:



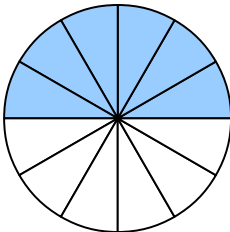
$$\frac{2}{6}$$



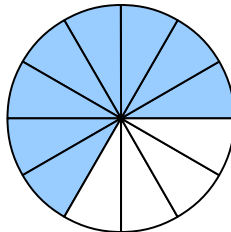
$$\frac{1}{2}$$



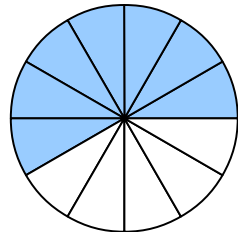
$$\frac{2}{3}$$



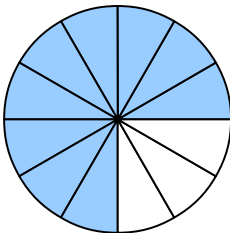
$$\frac{3}{6}$$



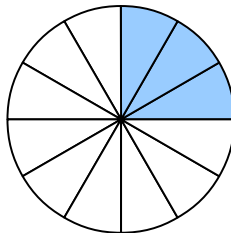
$$\frac{4}{6}$$



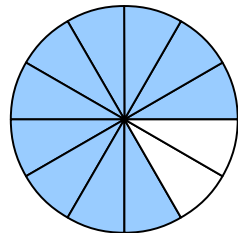
$$\frac{7}{12}$$



$$\frac{3}{4}$$



$$\frac{3}{12}$$



$$\frac{5}{6}$$